

8. b kategorija
8. b kategorija

grupa B




Drniš, 26. i 27. travnja 2025

Ime i prezime: _____

1. a) Izgradi i napiši zadane intervale u tonskom sustavu u smjeru strelice:

15 bodova



m.2↑

p.8↓

v.6↑

m.9↓

v.10↑

fis

g2


As

dis3

E


b) Prepoznavaj i napiši vrstu i veličinu zadanih intervala:

10 bodova



2. a) Izgradi zadane akorde ako je:

15 bodova



M $\frac{6}{4}$

P $\frac{6}{3}$

S $\frac{6}{4}$

D $\frac{6}{3}$

M $\frac{6}{3}$

zadani ton kvarta

zadani ton seksta

zadani ton kvarta


zadani ton terca

zadani ton seksta

8. b kategorija

b) Prepoznavaj zadane akorde i označi ih šifrom:

12 bodova




3. a) Prepoznavaj, označi i napiši vrstu zadanih septakorda:

10 bodova



b) Izgradi zadane septakorde navise:

10 bodova



VM7

MD7


P7

S7


VD7

4. Izgradi kromatske ljestvice u smjeru strelice (predznake piši ispred tonova):

8 bodova




B dur↑




f mol↓

8. b kategorija





G dur↓



h mol↑

5. Transkribiraj zadani ritamski primjer u zadanu mjeru:

12 bodova



6. Transponiraj zadani melodijski primjer:

8 bodova



E dur

_____od ukupno 100 bodova

Članovi ocjenjivačkog suda:

1. _____

2. _____

3. _____